

TAMBAH DAN TOLAK NOMBOR HINGGA 10


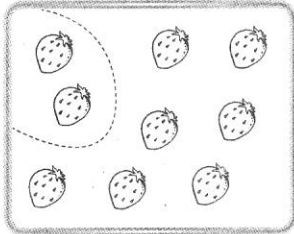


A Tulis pasangan nombor yang membentuk 9.


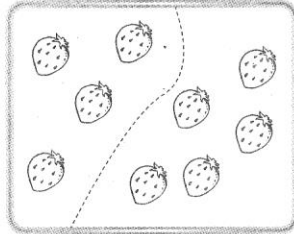
2.1(i)

BID5E1


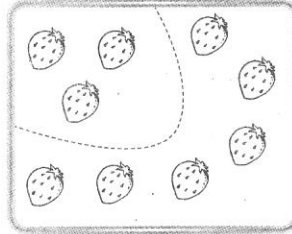
1



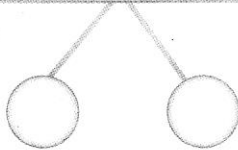
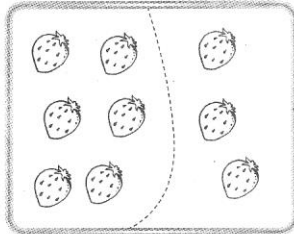
2




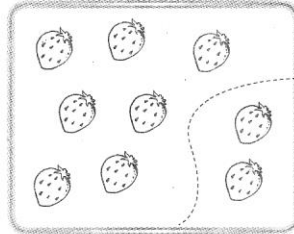
3



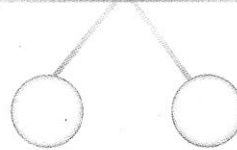
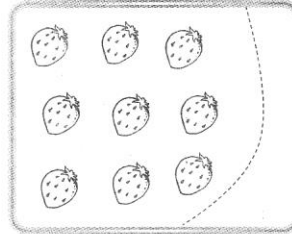
4



5



6

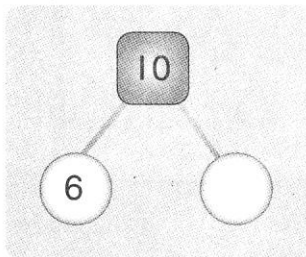


B Tulis pasangan nombor yang sesuai.

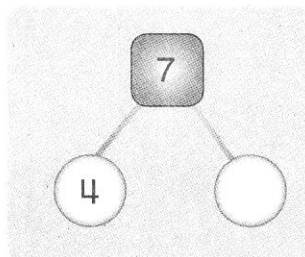
2.1(i,iii)

BID5E1

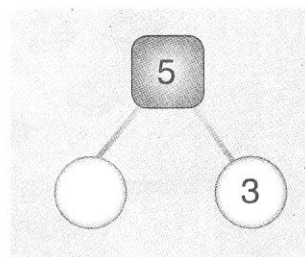
1



2



3



| Tema | Band | Standard Kandungan | Standard Pembelajaran | Deskriptor | Evidens | Standard Prestasi |
|-----------------------------------|------|--|-----------------------|------------|---------|-------------------|
| Tambah dan Tolak Nombor Hingga 10 | 1 | 2.1 Mengenal pasti pasangan nombor untuk membentuk satu nombor yang berkaitan. | 2.1(i) 2.1(i,iii) | BID5 | EI | BID5E1 |

PENILAIAN

Menguasai

Tidak Menguasai

Tandatangan guru: _____